


Name: \_\_\_\_\_

# Decimals: Tenths

Write the decimal and the fraction shown by each square.

a.



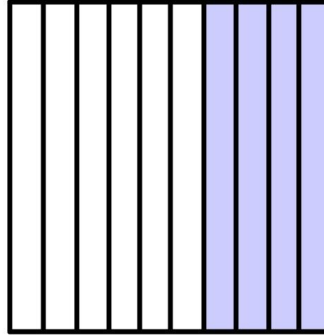
\_\_\_\_\_

b.




\_\_\_\_\_

c.



\_\_\_\_\_

d.



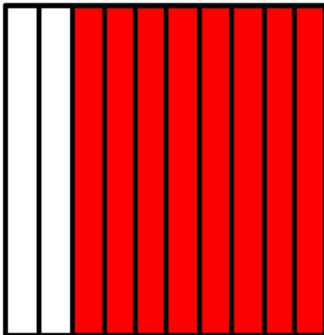
\_\_\_\_\_

e.




\_\_\_\_\_

f.



\_\_\_\_\_

g.



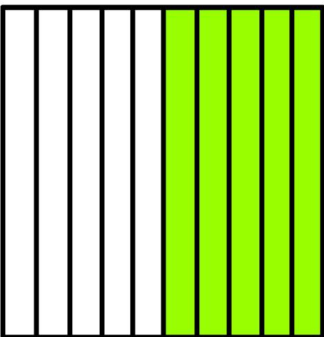
\_\_\_\_\_

h.




\_\_\_\_\_

i.




\_\_\_\_\_

j.



\_\_\_\_\_

k.




\_\_\_\_\_

# ANSWER KEY

## Decimals: Tenths

Write the decimal and the fraction shown by each square.

a.



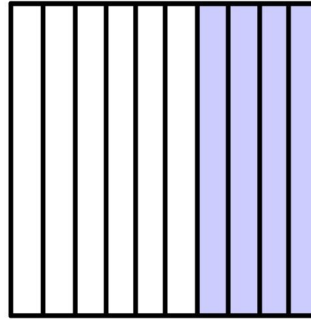
0.9     9/10

b.




0.1     1/10

c.




0.4     4/10

d.



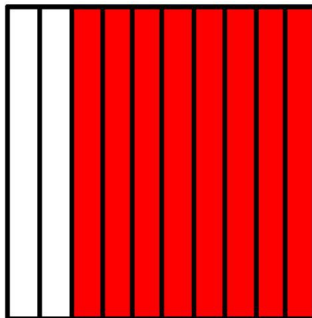
0.6     6/10

e.




0.3     3/10

f.




0.8     8/10

g.



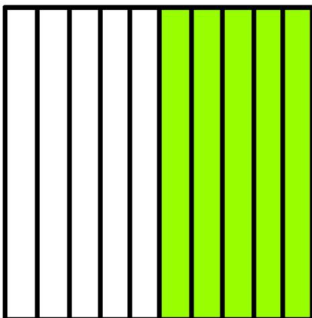
0.0     0/10

h.




0.2     2/10

i.



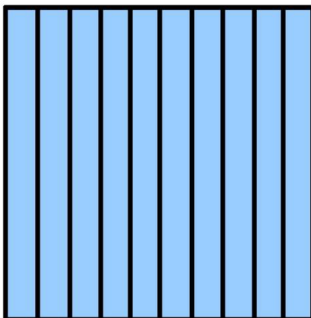
0.5     5/10

j.



0.7     7/10

k.



1.0     10/10